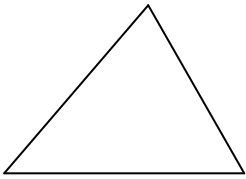


三角形三心及其性質學習單

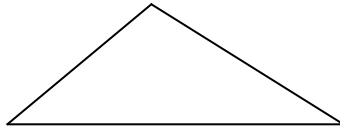
班級：_____ 座號：_____ 姓名：_____

一、請畫出下列三種三角形的內心。(三角平分線的交點為內心，內心到三邊的垂直距離等長)

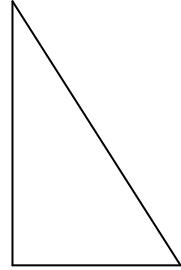
銳角三角形



鈍角三角形

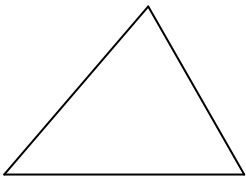


直角三角形

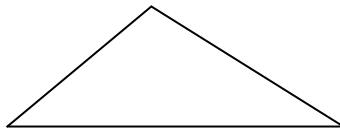


二、請畫出下列三種三角形的外心。(三中垂線的交點為外心，外心到三頂點的距離等長)

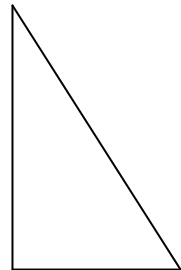
銳角三角形



鈍角三角形

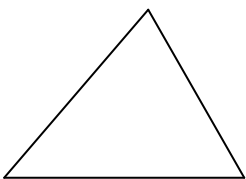


直角三角形

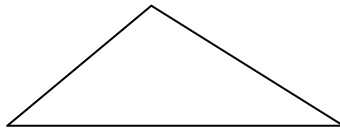


三、請畫出下列三種三角形的重心。(三中線的交點為重心)

銳角三角形



鈍角三角形



直角三角形

