



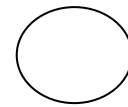
# Math Testing Practice

## Level 1

Read each of the following very carefully. Mark your answer by filling in the circle under the best answer.

### Section 1

1. Which of these is a square?



2. How many frogs are in the box?



3. Which is the written word for the number 5?

four

two

five

4. Which number completes this number sentence?




2

+



2

=



6

5

4



5. Which number comes next?

**18, 19, 20, 21, 22, \_\_\_\_\_**

24  
0

23  
0

25  
0

6. Which number completes the pattern?

**5, 10, 15, 20, 25, \_\_\_\_\_, 35**

30  
0

40  
0

26  
0

7. Which number is  $> 8$ ?

7  
0

10  
0

5  
0

8. Mark had 2 kittens. His mother gave him 3 more kittens. How many kittens does he have in all?



6  
0

4  
0

5  
0

9. Which of the following makes the number sentence true?

$$10 - \square = 2$$

8  
0

6  
0






4  
0



Name \_\_\_\_\_ Date \_\_\_\_\_

Use the pictograph to answer questions 10-12.

### Teddy Bears

Susan	
Mike	
Lynn	
Rob	
Cole	



= 2 teddy bears

10. How many teddy bears does Mike have?

4

6

8

11. Which child has 8 teddy bears?

Rob

Lynn

Susan

12. Which child has the same number of teddy bears as Mike?

Cole

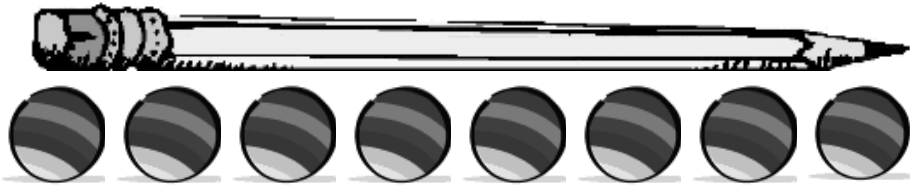
Susan

Rob



## Section 2

1. How many balls long is the pencil?




7

9

8

2. Which shape would come next if the pattern continues?



3. Which of the following is equal to  $5 + 1$ ?

$3 + 2$

$3 + 0$

$4 + 2$

4. How much money is in the box?



13¢

25¢

30¢

5. Which number is  $< 12$ ?

14

9

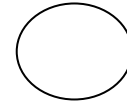
17



6. Which coin is equal to 25¢?



7. Which of the following is a triangle?



8. Which number has 1 ten and 9 ones?

29

19

9

9. Which number comes between 33 and 35?

32

36

34

10. Which of the following is equal to  $14 + 2$ ?

$13 + 1$

$15 + 3$

$8 + 8$

11. Amelia had 14 pencils in her pencil case. She gave 5 pencils to Mark. How many pencils does Amelia have left?

8

12

9



12. Griffin had 7 baseball cards. His brother gave him 8 more baseball cards. How many baseball cards does Griffin have now?

19

15

11

13. Which is the answer to  $15 + 3$ ?

18

17

19

14. Which is the answer to  $17 - 5$ ?

11

13

12

15. Which of these is the written word for the number 10?

three

two

ten

16. Which is the answer to  $9 - 6$ ?

3

5

4

17. Which number has 2 tens and 7 ones?

23

27

37

18. Which of the following makes the number sentence true?

$$18 - \boxed{\phantom{00}} = 16$$

3

4

2



Answers to Math Testing Practice Level 1


Section 1:

Pages 1-3:

1.
2. 3
3. five
4. 4
5. 23
6. 30
7. 10
8. 5
9. 8
10. 6
11. Susan
12. Cole

Section 2:

Pages 4-6:

1. 8
2.  $\triangle$
3.  $4 + 2$
4. 30¢
5. 9
6. 
7.  $\triangle$
8. 19
9. 34
10.  $8 + 8$
11. 9
12. 15
13. 18
14. 12
15. ten
16. 3
17. 27
18. 2