
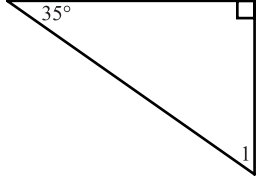
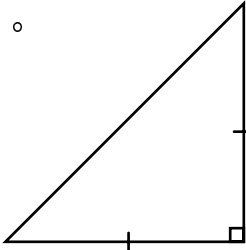
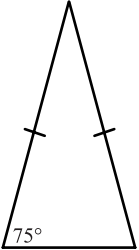

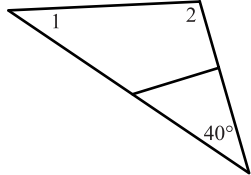
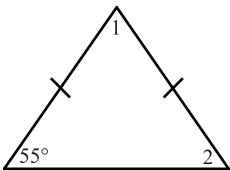


【配合課本章節】：1-2 三角和是 180 度

一、求出下列圖形指定角的度數。

<p>1. $\angle 1$。</p> 	<p>2. $\angle 1$。</p> 
<p>3. 等腰三角形底角。</p> 	<p>4. 等腰三角形頂角。</p> 
<p>5. 等腰三角形底角。</p> 	<p>6. $\angle 1 + \angle 2$。</p> 
<p>7. $\angle 1 + \angle 2$。</p> 	<p>8. $\angle 1$ 和 $\angle 2$。</p> 